


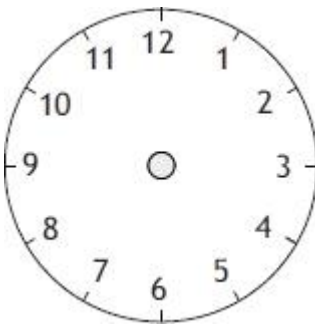

AWESOME ARITHMETIC!

Use your arithmetic, written methods and problem solving skills to answer all of the questions. Make sure you turn over!

$18.34 - 7.23$	$£2.17 \times 8 =$
$\frac{1}{3} + \frac{1}{3} = \underline{\quad}$ Write an equivalent fraction	What is $\frac{5}{8}$ of 40?
$345 \times 6 =$	What number is shown in Roman Numerals? C
Round 1786 to the nearest 10	$892 \div 4 =$

Now turn over for your problem solving and reasoning questions...

Complete the table.

Clock face	Digital time	Time in words
		
		
		

14 : 53

What time will the clock show in 20 minutes?