

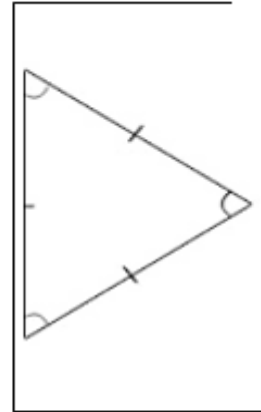
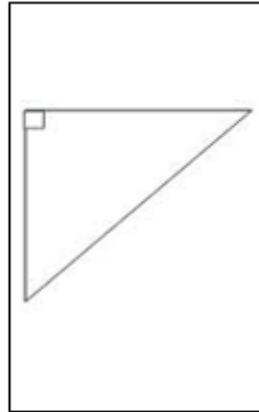
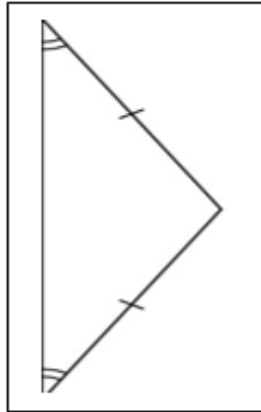
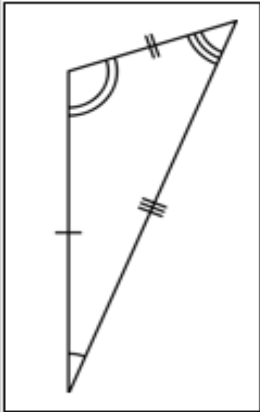
AWESOME ARITHMETIC!

Use your arithmetic, written methods and problem solving skills to answer all of the questions. Make sure you turn over!

$8912 + 9863 =$	$128 \div 5 =$
What is $\frac{3}{5}$ of 45?	$\pounds 45.66 - \pounds 12.89 =$
$289 \times 8 =$	Round 34.5 to the nearest whole number
Complete the number sentence $234.5 = 200 + 30 + \quad + \quad$	$38.7 \times 100 =$

Now turn over for your problem solving and reasoning questions...

Match each triangle to the correct name and description using a neat line...



Isosceles

Equilateral

Scalene

Right angle

Has 1 Right angle

2 equal sides
And
2 equal angles

3 equal sides
And
3 equal angles

No equal sides
And
No equal angles