



Spring I Spy and Add to 20



Spring I Spy and Add to 20



Count the number of each type of spring picture needed in the addition number sentence. Write the numbers in the boxes to create and then solve an addition number sentence.

 +  =

 +  =

 +  =

 +  =

 +  =