


**Q1.**


Match each clock to the time it shows.



twenty-five past four

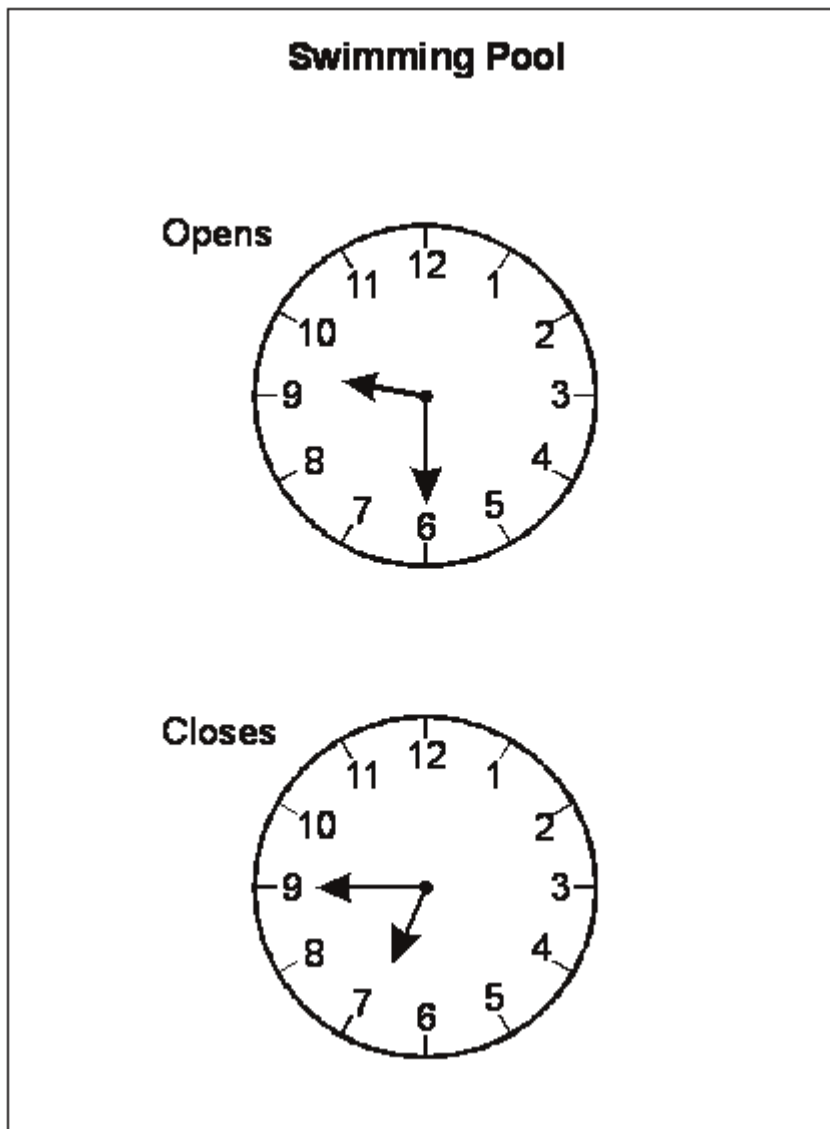


quarter to four



quarter past four

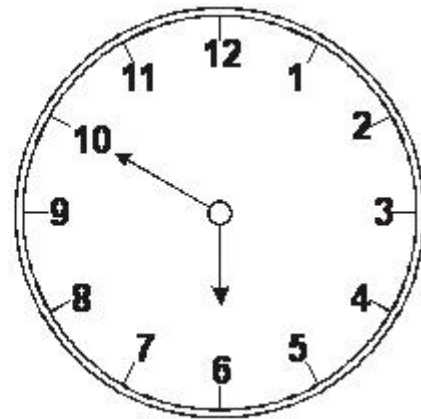
Q2.



At what time does the pool open?

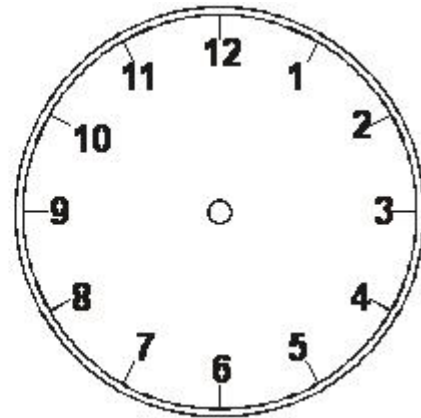
**Q3.**

It started raining at this time.



It rained for one hour.

Show the time on the clock when it stopped raining.



Q4.



The cake started to cook at this time.

**09:25**

It cooked for **50** minutes.

At what time did it finish cooking?

:

**Q5.**

This table shows the ages of some children.

<b>Name</b>	<b>Age</b>	
Fred	7 years	4 months
Harriet	7 years	0 months
Isla	6 years	10 months
Julian	7 years	6 months
Kate	6 years	11 months
Asim	6 years	11 months

Who is the youngest?

**Q6.**

This table shows the ages of some children.

<b>Name</b>	<b>Age</b>	
Fred	7 years	4 months
Harriet	7 years	0 months
Isla	6 years	10 months
Julian	7 years	6 months
Kate	6 years	11 months
Asim	6 years	11 months

How many children are older than Harriet?

**children**

**Q7.**

The bus left at 9 o'clock to go to the zoo.



It arrived 1 hour and 15 minutes later.

Draw a ring around the time it got to the zoo.

9:15

11:15


9:30

10:45

10:15

**Q8.**

Harry leaves school at



He gets home at







How long does he take to get home?

<div></div> <div>minutes</div>
--------------------------------

**Q9.**

Draw a tick (✓) on the clock which shows half past three





**Q10.**

Look at this clock.



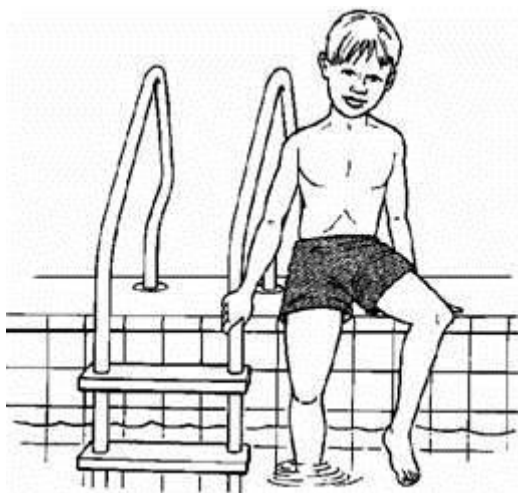
What time will the clock show **two hours later**?

Tick (✓) it.



**Q11.**

The table shows the times when some children start their swimming lessons.



name	time
Desi	9.15 am
Ella	9.45 am
Harry	8.45 am
Sita	7.15 am
Tom	8.15 am
Vicky	7.45 am

Which **2** children have lessons between Harry and Sita?

and

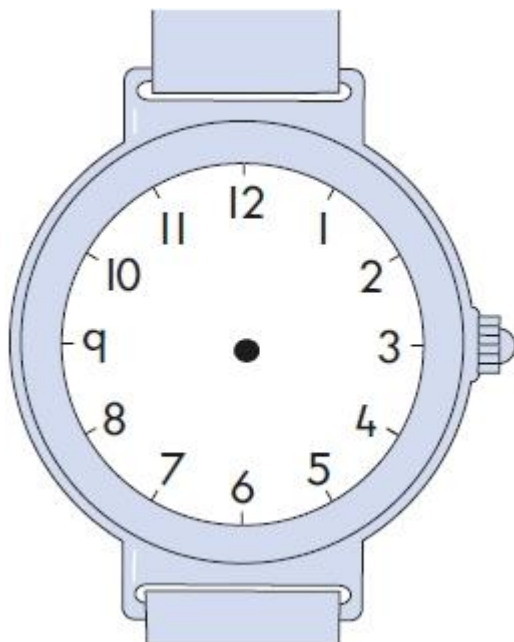
**Q12.**

Sita's watch shows this time.



Harry's watch shows the same time.

Draw the hands on his watch.



**Q13.**

Kemi goes to four clubs each week.

Which club lasts the **longest**?

Circle it.

**Swimming**

45 minutes

**Art**

2 hours

**Music**

75 minutes

**Drama**

1 hour

**Q14.**

Draw lines to match the correct times to the clocks.

One has been done for you.

**Nine o'clock**




**Five past eight**



**Twenty to one**




**Quarter to six**

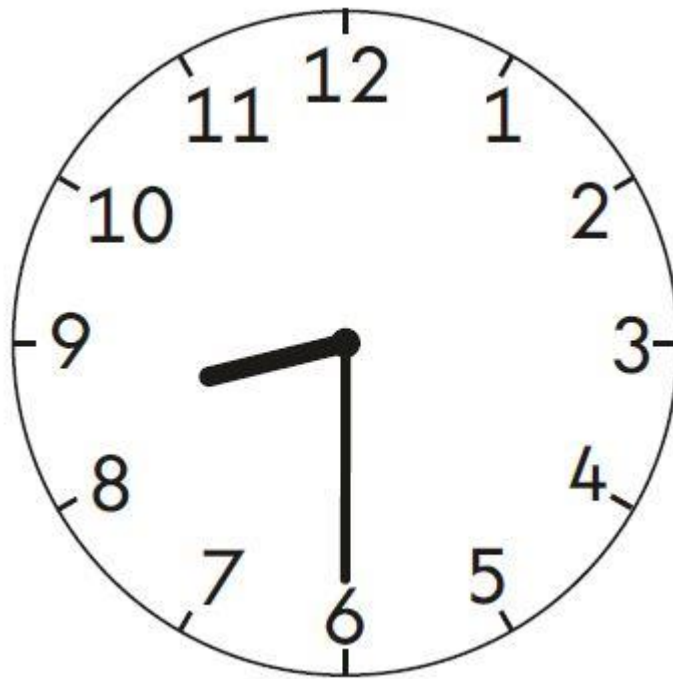


**Q15.**

Draw the minute hand on the clock to show **twenty-five past eight**.



Q16.



What time does the clock show?

Tick the correct box.

twenty to 6


half past 9

half past 8

quarter to 6

**Q17.**

Tick the clock face that shows **ten past twelve**.



**Q18.**

Circle the **shortest** time.

73 minutes

10 minutes

45 minutes

1 hour

**Q19.**

One plane lands every minute.

How many planes land in **1 hour**?

