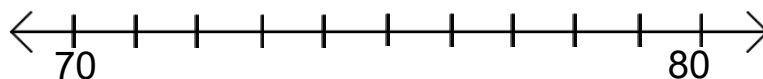


Fluency ten

1. Write this digit in words 109
2. Write three hundred and three in digits
3. $? = 9 + 6 + 5$
4. $12 + ? + 3 = 20$
5. Write all of the ODD numbers that are between 30 and 40
6. $3 \times 9 = ?$
7. Can you fill in the missing numbers?
21, 31, 41, ?, ?, 71, 81
8. $66 + 28 =$
9. $75 - 18 =$
10. 35 divided by 5

Fluency ten

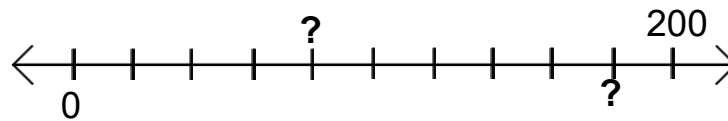
1. What is the value of underlined digit 6543?
2. $52 + 59 =$
3. $? = 78 - 34$
4. What is **10 more** than 91?
5. $10 \times 5 =$
6. What is one half of 16 =
7. Write an even number that could go on this number line.



8. $65 + 36 =$
9. $65 \div 5 =$
10. $2 \times 12 = 30 - ?$

Fluency ten

- $67 + 18 = ?$
- How many sides does a pentagon have?
- What goes with 3 to make 20?
- $92 - 46 =$
- $110 \div 10 =$
- $7 + 3 + 7 =$
- Can you fill in the missing numbers?



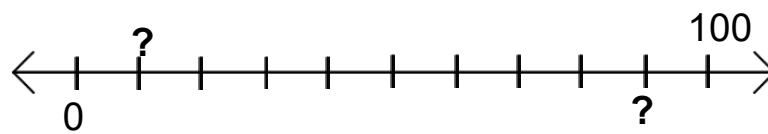
- $18 + ? = 6 + 15$
- Name a regular shape with 6 sides
- My number has 8 tens and 12 ones. What number do I have?

Fluency ten

- Write this digit in words 13
- Write this number in words 123
- What is **10 less** than 104?
- What is **10 more** than 99?
- Double 15 =
- Half of 100 =
- Can you fill in the missing numbers?
12, 22, ?, 32, ?, 62, 72
- $58 + 35 =$
- $50 = 25 + ?$
- $5 + ? = 10 \times 3$

Fluency ten

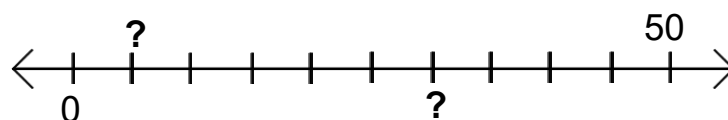
1. What is the value of underlined digit 178?
2. How many **TENS** are in this number? 67
3. $4 \times 11 =$
4. What is **10 less** than 11?
5. $123 \times 0 =$
6. Half of 80 =
7. Can you fill in the missing numbers?



8. $56 + 22 =$
9. $57 - 29 =$
10. $1 + ? = 20$

Fluency ten

1. $44 \div 4 = ?$
2. How many ones are in this number 112?
3. What is **1 less** than 100?
4. What is **10 more** than 54?
5. Double 10 =
6. Half of 2 =
7. Can you fill in the missing numbers?

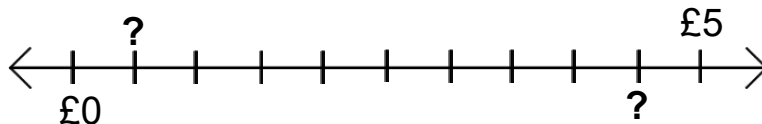


8. $17 + ? = 6 + 30$
9. $87 + 24 =$
10. My number has 4 tens and 15 ones. What number do I have?

Fluency ten

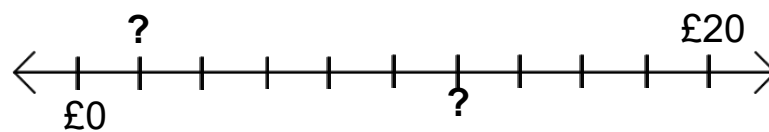
1. A ball costs £10. It's price was reduced by $\frac{1}{4}$. How much is the ball now?
2. Write this word in digits **ninety five**
3. What is **10 less** than 51?
4. What is **10 more** than 20?
5. Double 16 =
6. Half of 48 =
7. Can you fill in the missing numbers?
5, 10, 15, ?, ?, 30, 35
8. $93 + 28 =$
9. $100 = 12 + ?$
10. $15 + ? = 4 \times 10$

Fluency ten

1. What is the value of underlined digit 559?
2. How many **TENS** are in this number? 193
3. $17 + ? = 15 + 15$
4. What is **10 more** than 2?
5. $12 \times 0 =$
6. Half of 200 =
7. Can you fill in the missing numbers?

8. $31 + ? = 100$
9. $20 = 34 - ?$
10. $0 + ? = 10$

Fluency ten

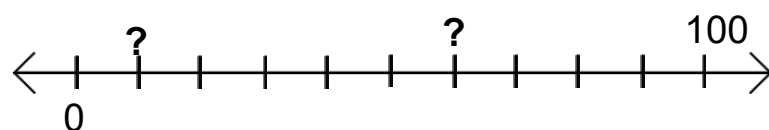
- $23 + 21 = ?$
- Write this number in words 105
- What is **1 less** than 100?
- What is **10 more** than 99?
- Double 11 =
- Half of 50 =
- Can you fill in the missing numbers?



- $7 + ? = 13 + 7$
- $20 - 5 = 10 + ?$
- $52 - 26 =$

Fluency ten

- What is the value of underlined digit 472?
- How many **ONES** are in this number? 980
- $14 + ? = \text{Double } 20$
- What is **1 more** than 109?
- $19 + 76 =$
- $18 + 3 + 2 =$
- Can you fill in the missing numbers?



- $18 + 13 + 8 =$
- $16 + 12 + 22 =$
- $12 + ? + 20 = 100$