

Name _____

Date _____



NUMBER BONDS TO 20 SHEET 7

Fill in the missing numbers to make 20.

- 1) $17 + \underline{\quad} = 20$ 2) $4 + \underline{\quad} = 20$ 3) $10 + \underline{\quad} = 20$
 4) $6 + \underline{\quad} = 20$ 5) $19 + \underline{\quad} = 20$ 6) $13 + \underline{\quad} = 20$
 7) $\underline{\quad} + 12 = 20$ 8) $\underline{\quad} + 16 = 20$ 9) $\underline{\quad} + 8 = 20$
 10) $20 = \underline{\quad} + 14$ 11) $20 = \underline{\quad} + 5$ 12) $20 = \underline{\quad} + 11$


Join the bonds: join up the number bonds that add up to make 20.

12	13	5	15	2
	4		7	8
16		10	10	18

Circle the bonds: circle all the pairs of numbers that total 20.

7	18	5	15	14	4
13	10	2	11	16	8
10	3	9	12	1	19
5	14	17	8	13	4
7	11	15	6	20	16
10	9	14	5	3	0

See if you can
find at least 10
pairs!



Name

Date



NUMBER BONDS TO 20 SHEET 7 ANSWERS

Fill in the missing numbers to make 20.

1) $17 + \underline{3} = 20$

2) $4 + \underline{16} = 20$

3) $10 + \underline{10} = 20$

4) $6 + \underline{14} = 20$

5) $19 + \underline{1} = 20$

6) $13 + \underline{7} = 20$

7) $\underline{8} + 12 = 20$

8) $\underline{4} + 16 = 20$

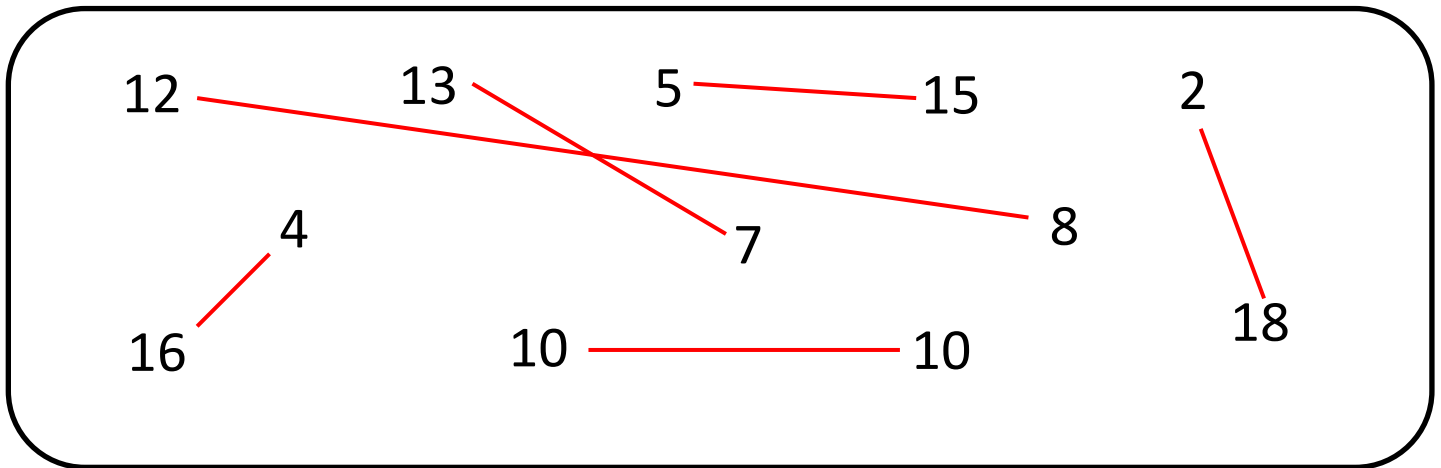
9) $\underline{12} + 8 = 20$

10) $20 = \underline{6} + 14$

11) $20 = \underline{15} + 5$

12) $20 = \underline{9} + 11$


Join the bonds: join up the number bonds that add up to make 20.



Circle the bonds: circle all the pairs of numbers that total 20.

7	18	5	15	14	4
13	10	2	11	16	8
10	3	9	12	1	19
5	14	17	8	13	4
7	11	15	6	20	16
10	9	14	5	3	0

See if you can
find at least 10
pairs!



Free Math Sheets, Math Games and Math Help

MATH-SALAMANDERS.COM