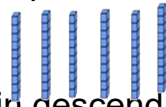


# Fluency Fifteen

Session 4

1. Using the symbols  $<$   $>$   $=$ , complete the sentence.

$12 \times 5$



2. Write these measurements in descending order.

86cm    68cm    861cm    168cm    186cm

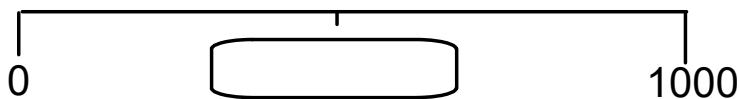
3. \_\_\_\_\_ is 10 less than 706

4. True or false?

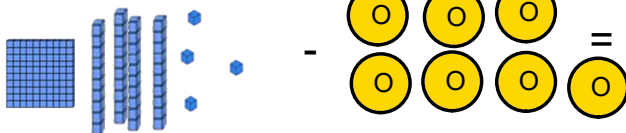
**Six hundred and eighty-three**

**The value of the ones digit is 3.**

5. What number should be shown in the box?



6.



7.  $800 + \underline{\quad} + 7 = 877$

8.  $\underline{\quad} + 350 = 750$

9.  $8 \times 0 =$

10.  $\underline{\quad} \div 10 = 6$

11.  $462 + 359 =$

12.  $624 - 231 =$

13.  $533 - 245 =$

14. How many months have thirty days?

15. What will the time be 20 minutes later than the time shown on the clock? Give your answer digitally.

