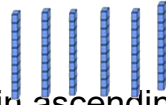


Fluency Fifteen

Session 4

1. Using the symbols $<$ $>$ $=$, complete the sentence.

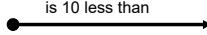
7×8



2. Write these measurements in ascending order.

76mm 67mm 761mm 167mm 176mm

3. _____ is 10 less than 305

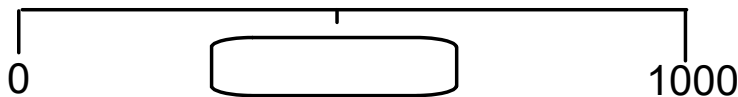


4. True or false?

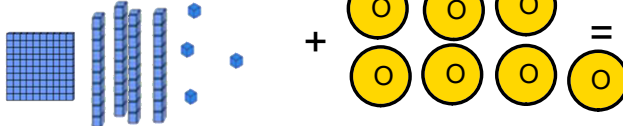
Five hundred and eighty-eight

The value of the ones digit is 5.

5. What number should be shown in the box?



6.



7. $600 + \underline{\quad} + 5 = 665$

8. $\underline{\quad} + 250 = 800$

9. $8 \times 6 =$

10. $\underline{\quad} \div 10 = 4$

11. $385 + 449 =$

12. $715 - 342 =$

13. $624 - 356 =$

14. How many months have thirty-one days?

15. What will the time be 10 minutes later than the time shown on the clock? Give your answer digitally.

