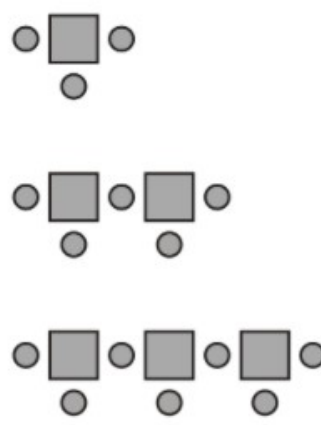
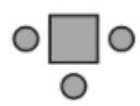
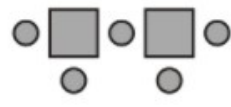
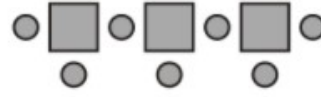


Goal Free Problem - Mastery - Year 6

Here is a sequence of patterns made from squares and circles.



| | number of squares | number of circles |
|---|-------------------|-------------------|
|  | 1 | 3 |
|  | 2 | 5 |
|  | 3 | 7 |

The sequence continues in the same way.