

4 times table worksheet

Colour in all the boxes that are multiples of 4.

36	37	8	20	34
11	4	24	22	16
23	2	44	6	40
3	36	20	48	12
24	19	32	28	44




Can you put the following multiples of 4 in **descending** order?

24 12
4 200
36 44
1000 28

Can you put the following multiples of 4 in **ascending** order?

32 0
8 100
400 40
20 16

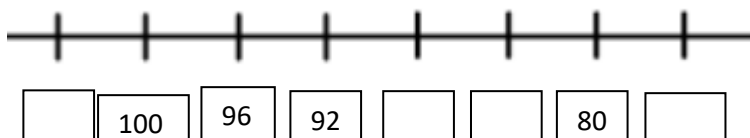
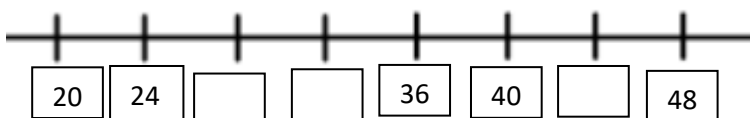
Archie the cat has spilt paint over the number sequences below. Can you fill in the missing numbers?

a) 0, 4, 8, 12, 16,   

b) 40,  , 32, 28,   16, 



Find the missing values on the number lines.



Finally, please log in to Purple Mash and complete the activity from your 2do list which has been set for you today titled '4x table pairs'.