

8 times table worksheet

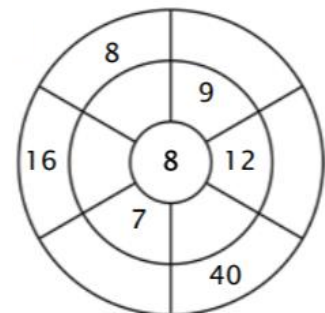
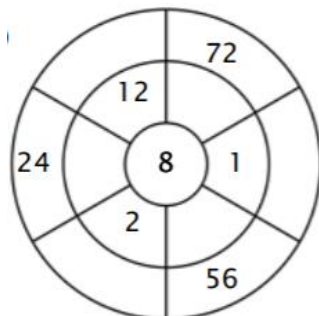
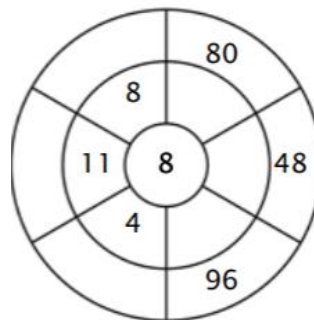
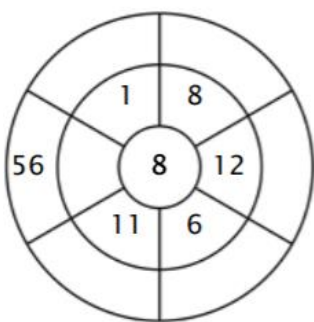
Count in 8s and colour each multiple of 8 in the grid.

1	2	3	4	5	6	7	8	9	10
11	12	13	14	15	16	17	18	19	20
21	22	23	24	25	26	27	28	29	30
31	32	33	34	35	36	37	38	39	40
41	42	43	44	45	46	47	48	49	50
51	52	53	54	55	56	57	58	59	60
61	62	63	64	65	66	67	68	69	70
71	72	73	74	75	76	77	78	79	80
81	82	83	84	85	86	87	88	89	90
91	92	93	94	95	96	97	98	99	100
101	102	103	104	105	106	107	108	109	110
111	112	113	114	115	116	117	118	119	120
121	122	123	124	125	126	127	128	129	130
131	132	133	134	135	136	137	138	139	140
141	142	143	144	145	146	147	148	149	150
151	152	153	154	155	156	157	158	159	160
161	162	163	164	165	166	167	168	169	170
171	172	173	174	175	176	177	178	179	180
181	182	183	184	185	186	187	188	189	190
191	192	193	194	195	196	197	198	199	200

Work out these answers:

- a) $8 \times 5 =$
- b) $3 \times 8 =$
- c) $8 \times 9 =$
- d) $12 \times 8 =$
- e) $8 \times 20 =$
- f) $8 \times 100 =$
- g) $13 \times 8 =$
- h) $8 \times 50 =$
- i) $___ \times 8 = 88$
- j) $8 \times ___ = 64$
- k) $8 \times ___ = 200$
- l) $___ \times 8 = 184$

Complete the circle by multiplying the number in the centre by the middle ring to get the outer numbers.



Finally, please log in to Purple Mash and complete the activity from your 2do list which has been set for you today titled '8x table pairs'.