

Name _____


Date _____



ADDITION SENTENCES TO 12 SHEET 4

Write the addition sentence that matches each picture.

1)



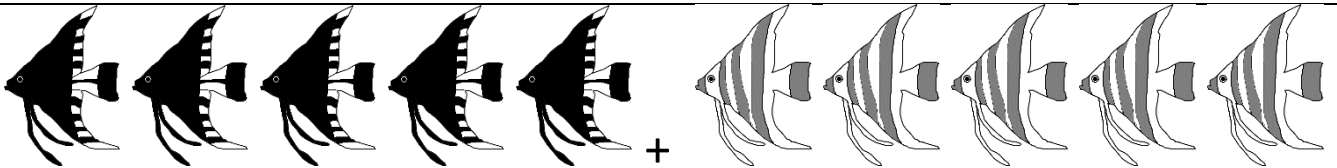
$$\underline{\quad} + \underline{\quad} = \underline{\quad}$$

2)



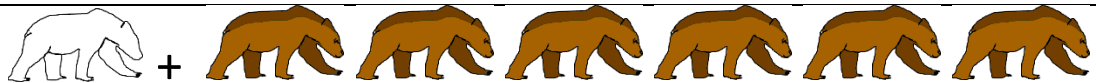
$$\underline{\quad} + \underline{\quad} = \underline{\quad}$$

3)




$$\underline{\quad} + \underline{\quad} = \underline{\quad}$$

4)




$$\underline{\quad} + \underline{\quad} = \underline{\quad}$$

5)



$$\underline{\quad} + \underline{\quad} = \underline{\quad}$$

6)



$$\underline{\quad} + \underline{\quad} = \underline{\quad}$$


Name

Date



ADDITION SENTENCES TO 12 SHEET 4 ANSWERS

1)



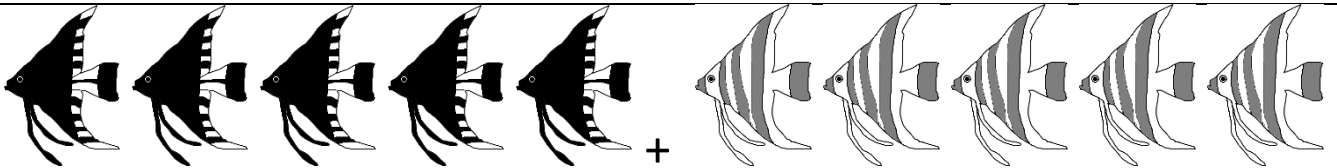
$$4 + 6 = 10$$

2)



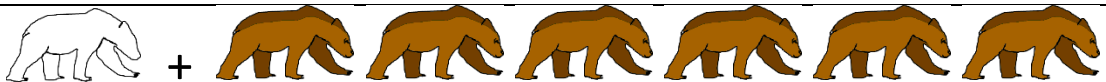
$$4 + 5 = 9$$

3)




$$5 + 5 = 10$$

4)




$$1 + 6 = 7$$

5)



$$3 + 9 = 12$$

6)



$$7 + 3 = 10$$