

Year One

Home Learning

Maths

Year One - Maths

Each day your child will have:

- 10 maths fluency questions to complete.
- A choice of three maths challenges

(Please complete one, two or all three challenges.

Choose a challenge that is appropriate for your child. If you are unsure which challenges to choose please contact your child's class teacher.)

- Optional extra tasks

Maths Fluency

1. Write 5 as a word.
2. What is one less than 71?
3. What is one more than 64?

4.

91	92	93			
----	----	----	--	--	--

5. $5 + \underline{\quad\quad\quad} = 10$

6. $12 + \underline{\quad\quad\quad} = 20$

7. $20 - \underline{\quad\quad\quad} = 14$

8.

10	12	14			
----	----	----	--	--	--

9.

5	10	15			
---	----	----	--	--	--

10. 12 12

<	>	=
---	---	---

Addition within 12

Our Learning Objective:

I can use concrete objects, pictorial representations, and missing number problems, solve one-step problems that involve addition.

Hello!

Today we are going to learn about addition.

There are lots of words that mean addition
(see my key words box).

You can use objects from around the house
(eg. pasta, colours, lego, etc.) as objects to
help you practice your adding skills.

Key Words:

Addition

Plus

increase

more

total

altogether

sum

add



Miss Devine



Mrs Koopman



Teaching Video



Please revise the following maths teaching video.



- Adding within 12

Today's Frog Challenge

Count the objects to write the number sentence and work out the calculation.


1)  + 
___ + ___ = ___

2)  + 
___ + ___ = ___

3)  + 
___ + ___ = ___


Today's Monkey Challenge

Match the pictures with the number sentence and the answer.



$$3+5$$

$$=8$$



$$5+5$$

$$=9$$

Today's Lion Challenge

There are addition tasks on Purple Mash (see link below).
If you are unsure of your child's login details. Please
contact their class teacher.



<https://www.purplemash.com/sch/cookridge-ls16>



Optional Extra Maths

Complete the games on Top Marks



<https://www.topmarks.co.uk/addition/addition-to-10>

★ 7

$$5 + 3 = ?$$

How many animals are there altogether?

9 6 8

Topmarks

If you have any questions please email

keystage1@cookridgeprimaryschool.org.uk

Attachments

1 Monday - Maths - Lion Challenge - Four in a row.pdf

2 Monday - Maths - Monkey Challenge - Make a cube using the net.pdf

2 Monday - Maths - Lion Challenge - Memory Pairs.pdf