

Year One

Home Learning

Maths

Year One - Maths

Each day your child will have:

- 10 maths fluency questions to complete.
- A choice of three maths challenges

(Please complete one, two or all three challenges.

Choose a challenge that is appropriate for your child. If you are unsure which challenges to choose please contact your child's class teacher.)

- Optional extra tasks

Maths Fluency

1. Write 4 as a word.
2. What is one less than 65?
3. What is one more than 45?

4.

76	75	74			
----	----	----	--	--	--

5. $0 + \underline{\hspace{2cm}} = 10$

6. $12 + \underline{\hspace{2cm}} = 20$

7. $20 - \underline{\hspace{2cm}} = 10$

8.

4	6	8			
---	---	---	--	--	--

9.

50	55	60			
----	----	----	--	--	--

10. 34 76

<	>	=
---	---	---

Addition within 12

Our Learning Objective:

I can use concrete objects, pictorial representations, and missing number problems, solve one-step problems that involve addition.

Hello!

Today we are going to learn about addition.

There are lots of words that mean addition
(see my key words box).

You can use objects from around the house
(eg. pasta, colours, lego, etc.) as objects to
help you practice your adding skills.

Key Words:

Addition

Plus

increase

more

total

altogether

sum

add



Miss Devine



Mrs Koopman

Teaching Video

Please revise the following maths teaching video.

- Adding on a number line

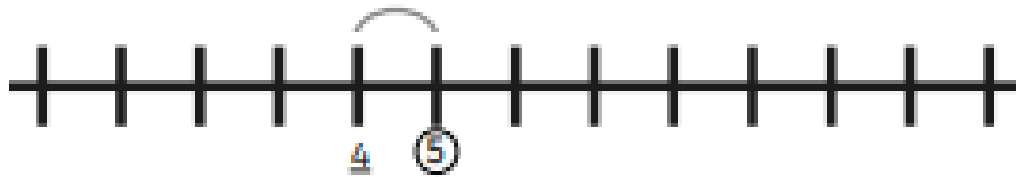
Today's Frog Challenge

Use the number line to solve the calculation.

Show your working out on the number line.


Example:

$$\underline{4} + 1 = \textcircled{5}$$



Today's Monkey Challenge

Work out the calculation and colour the section in the right colour.



Today's Lion Challenge

There are addition tasks on Purple Mash (see link below).
If you are unsure of your child's login details. Please
contact their class teacher.



<https://www.purplemash.com/sch/cookridge-ls16>



Optional Extra Maths

Addition four in a row

Dice Addition 4-in-a-Row

You will need:


2 dice

2 different coloured sets
of 13 counters

The aim of the game is to get
four of your own counters in
a row.

Roll the two dice. Add the
numbers together and place
a counter on that number.

Take it in turns until a player
wins or the board fills up.



2	5	10	8	3
4	11	6	4	10
5	7	2	12	8
11	6	4	9	5
12	3	8	6	9

If you have any questions please email

keystage1@cookridgeprimaryschool.org.uk

Attachments

1 Monday - Maths - Lion Challenge - Four in a row.pdf

2 Monday - Maths - Monkey Challenge - Make a cube using the net.pdf

2 Monday - Maths - Lion Challenge - Memory Pairs.pdf