

Year One

Home Learning

Maths

Year One - Maths

Each day your child will have:

- 10 maths fluency questions to complete.
- A choice of three maths challenges

(Please complete one, two or all three challenges.

Choose a challenge that is appropriate for your child. If you are unsure which challenges to choose please contact your child's class teacher.)

- Optional extra tasks

Maths Fluency

1. Write 17 as a word.

2. What is one less than 76?

3. What is one more than 74?

4.

34	35	36			
----	----	----	--	--	--

5. $9 + \underline{\quad\quad\quad} = 10$

6. $7 + \underline{\quad\quad\quad} = 20$

7. $20 - \underline{\quad\quad\quad} = 8$

8.

40	50	60			
----	----	----	--	--	--

9.

8	10	12			
---	----	----	--	--	--

10. 34 34

<	>	=
---	---	---

Addition within 12

Our Learning Objective:

I can use concrete objects, pictorial representations, and missing number problems, solve one-step problems that involve addition.

Hello!

Today we are going to learn about addition.

There are lots of words that mean addition
(see my key words box).

You can use objects from around the house
(eg. pasta, colours, lego, etc.) as objects to
help you practice your adding skills.

Key Words:

Addition

Plus

increase

more

total

altogether

sum

add



Miss Devine



Mrs Koopman

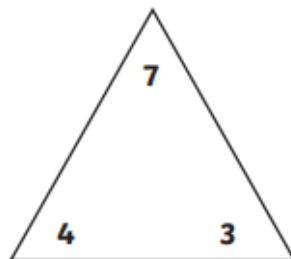
Teaching Video

Please revise the following maths teaching video.

- Fact Families

Today's Frog Challenge

Complete the fact family



<input type="text"/>	+	<input type="text"/>	=	<input type="text"/>
<input type="text"/>	+	<input type="text"/>	=	<input type="text"/>
<input type="text"/>	-	<input type="text"/>	=	<input type="text"/>
<input type="text"/>	-	<input type="text"/>	=	<input type="text"/>

Today's Monkey Challenge

Work out the addition word problem

Addition Word Problem Challenge Cards



Megan has 4 sweets and mum gives her 2 more. How many sweets does she have altogether?




Answer:

Addition Word Problem Challenge Cards



Sam has 2 old pencils. She gets 8 new pencils for her birthday. How many pencils does she have altogether?

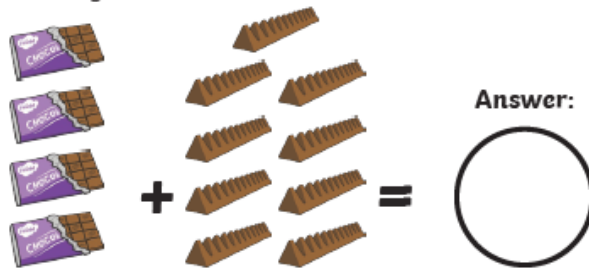


Answer:

Addition Word Problem Challenge Cards



Tom's dad has 4 chocolate bars and Tom has 9 chocolate bars. How many chocolate bars do they have altogether?




Answer:

Addition Word Problem Challenge Cards



A dog has 5 sticks and finds 3 more. How many sticks does the dog have altogether?



Answer:

Today's Lion Challenge

There are addition tasks on Purple Mash (see link below).
If you are unsure of your child's login details. Please
contact their class teacher.



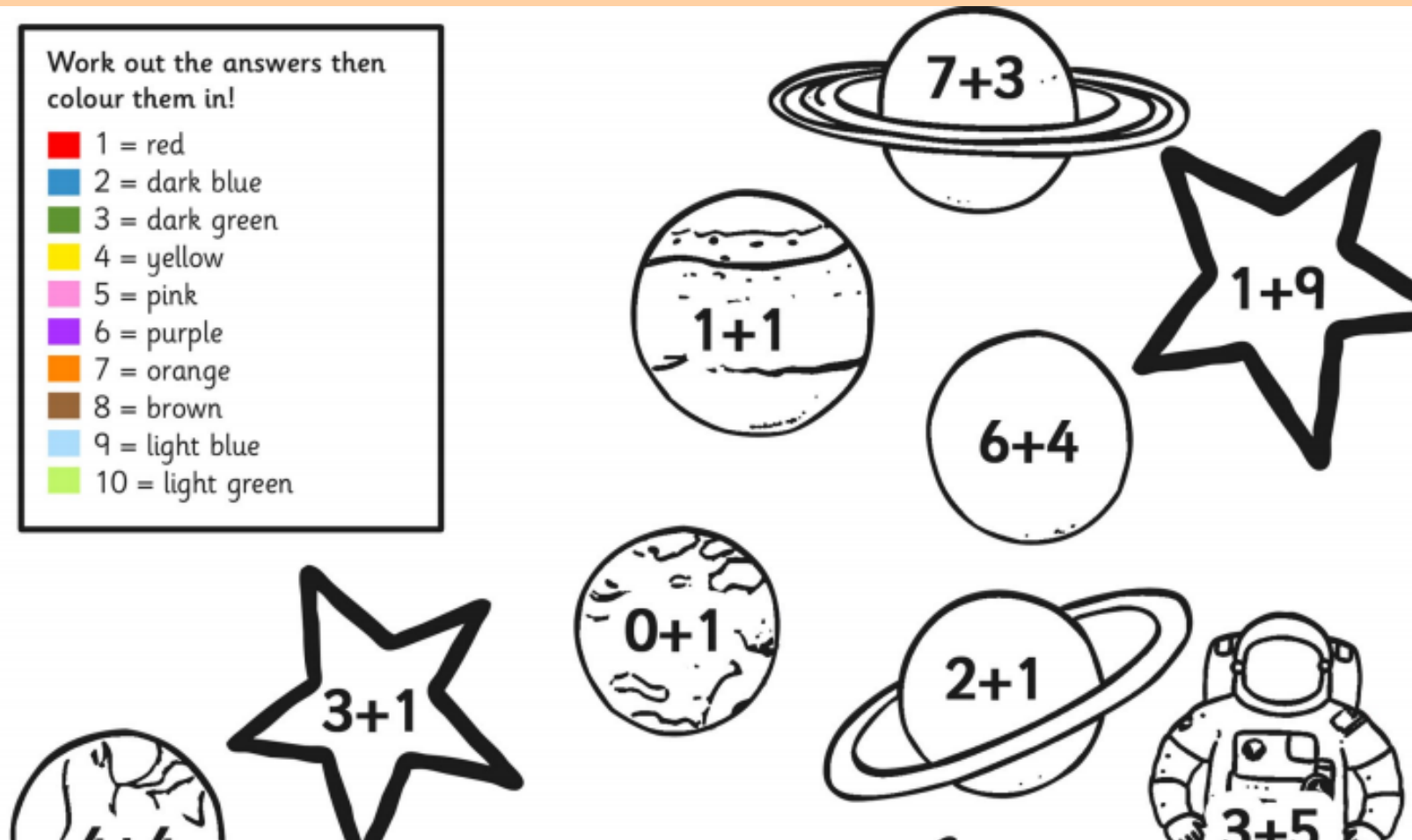
<https://www.purplemash.com/sch/cookridge-ls16>

Optional Extra Maths

Addition colour by number

Work out the answers then colour them in!

-  1 = red
-  2 = dark blue
-  3 = dark green
-  4 = yellow
-  5 = pink
-  6 = purple
-  7 = orange
-  8 = brown
-  9 = light blue
-  10 = light green



If you have any questions please email

keystage1@cookridgeprimaryschool.org.uk

Attachments

1 Monday - Maths - Lion Challenge - Four in a row.pdf

2 Monday - Maths - Monkey Challenge - Make a cube using the net.pdf

2 Monday - Maths - Lion Challenge - Memory Pairs.pdf