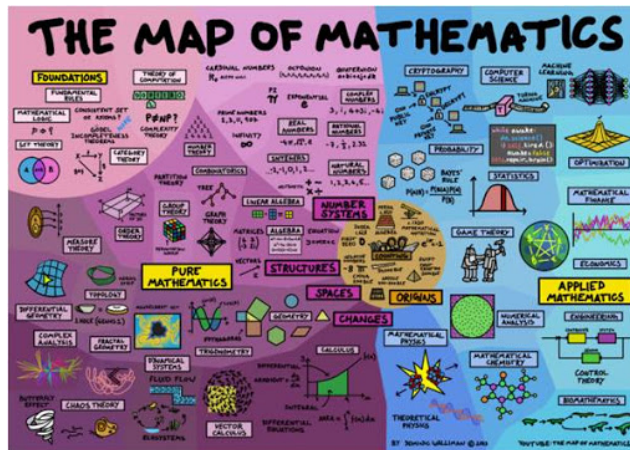


# Year 2

## Home Learning



### Our math's objectives...



# Time

#### Children should be able to...

- tell and write the time to five minutes, including quarter past/to the hour and draw the hands on a clock face to show these times.
- know the number of minutes in an hour and the number of hours in a day
- compare and sequence intervals of time

# Day 1 Fluency 10

10 questions in 10 minutes...are you up for the challenge?

*Going through the answers and discussing them is even more important than them completing the task...*

- 1)  $46 - 28 =$
- 2)  $? = 54 + 18$
- 3) How many minutes in 1 hour?
- 4)  $7 \times 5 =$
- 5)  $8 + 12 + 10 =$
- 6) Ten more than 16 = ?
- 7) 76 is one less than ?
- 8) Half of 24 =
- 9)  $? - 5 = 15$
- 10) 32 is ten less than ?



## Frog Challenge 1









Name

Date

### TELLING THE TIME TO 5 MINUTES SHEET 2A



Write the correct analogue time underneath each clock. The first one has been done for you.

 5 past 2	 past	 past	 to
			

Open "Teaching video 1" for today's teaching video...

<https://www.youtube.com/watch?v=...> Teacher Video 1

Open "Time activity DAY 1" for today's activity...

Write what time each clock shows using past or to



## Optional Extra Maths

Try these tasks and web based games to help you keep on top of your maths...

*(All children should have their logins for the web based platforms. If not, please email and your teacher will endeavor to send them to you)*

**Choose a game or idea from the extra activity idea sheet**

**Purple Mash** - login and find the assigned games

**TT Rockstars** - login and have a go at your 2's, 5's and 10's

**Numbots** - login to rehearse your very important number bonds

**Topmarks** - an amazing website with a range of interesting games to play

If you have any questions  
please email...

keystage1@cookridgeprimarys  
chool.org.uk