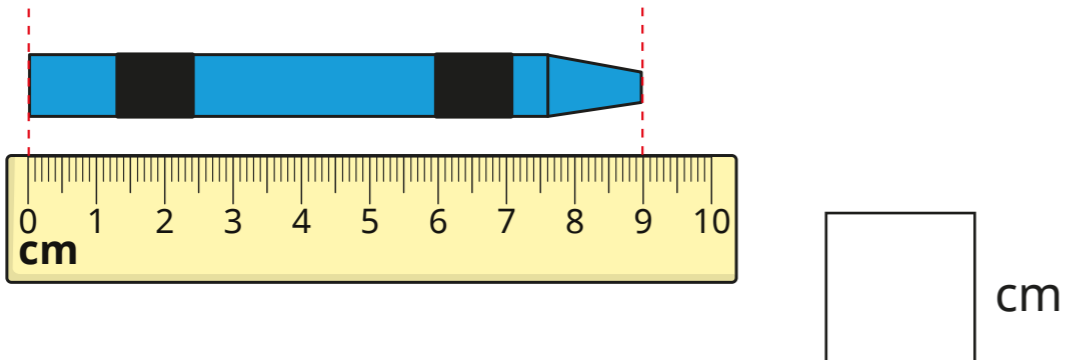
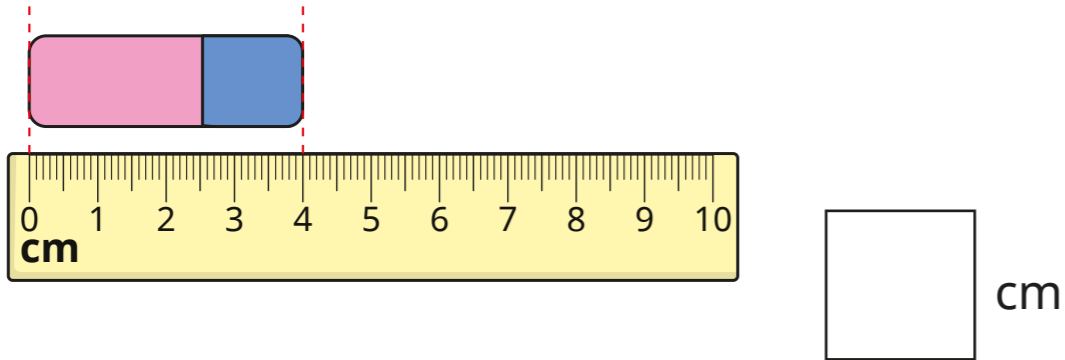


# Compare lengths and heights

1 a) What is the length of each object?



b) Choose a word to complete the sentences.

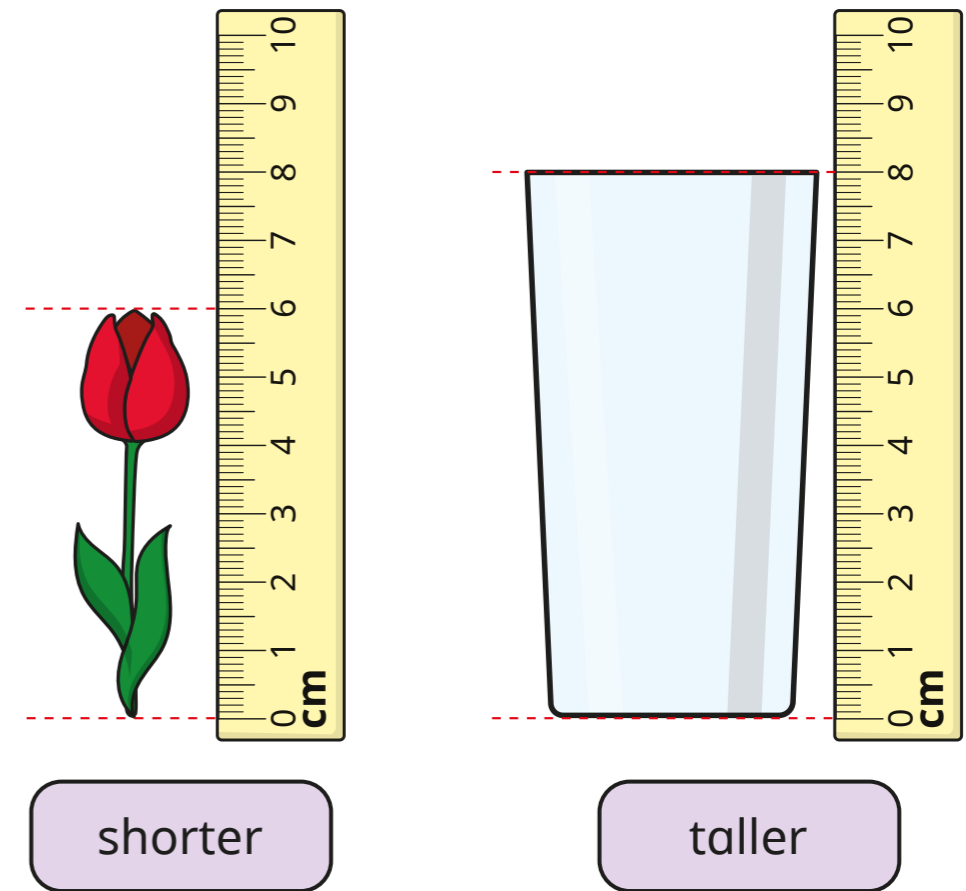
shorter

longer

The rubber is \_\_\_\_\_ than the crayon.

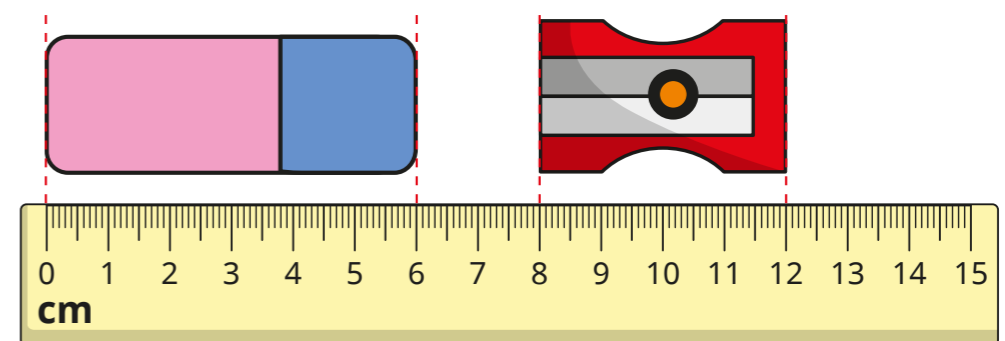
The crayon is \_\_\_\_\_ than the rubber.

2 Choose a word to complete the sentence.



The flower is \_\_\_\_\_ than the glass.

3



Choose a word to complete the sentence.

shorter

longer

The rubber is \_\_\_\_\_ than the sharpener.

4 Write  $<$ ,  $>$  or  $=$  to compare the measurements.

a) 9 cm  23 cm

b) fifty metres  50 m

c) 5 m  fifteen metres

d) 87 cm  83 cm

e) one metre  1 cm

5 Complete the statements.

a)  cm  $<$  41 cm

b) 14 m  $<$   m

c) 14 cm  $>$   cm

d) 12 m  $<$   m  $<$  20 m

Is there more than one answer for each?


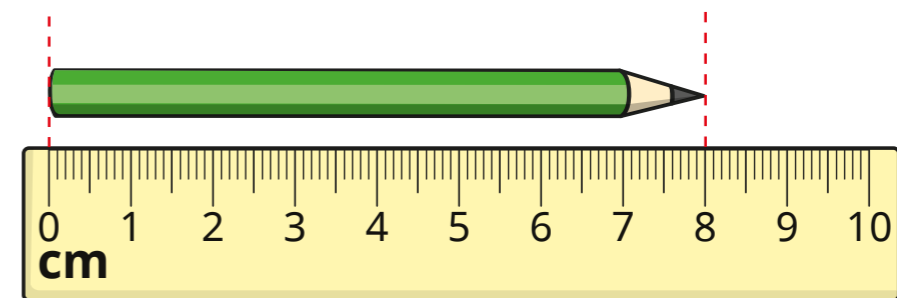
6

5 m = 5 cm

Why is the statement wrong?  
Talk about it with a partner.

7

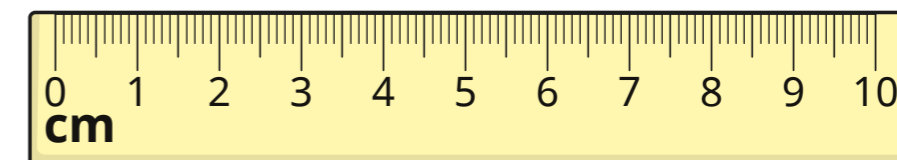
Here is Jo's pencil.



Sam

My pencil is shorter than Jo's pencil.

Draw Sam's pencil.



Compare answers with a partner.

